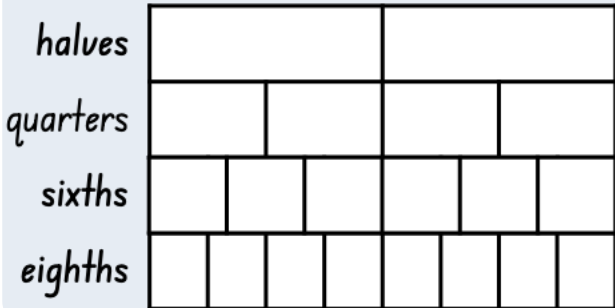


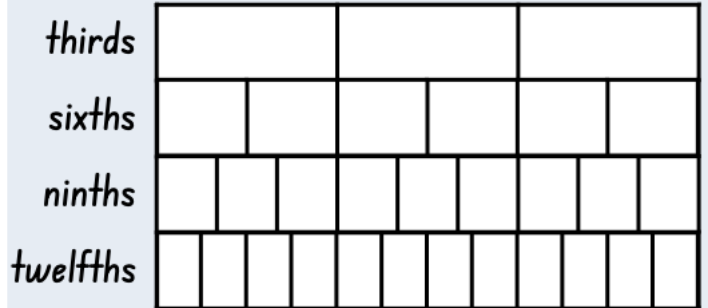
Equivalent Fractions

Colour to show the equivalent fractions then fill in the missing numbers to show the fractions.

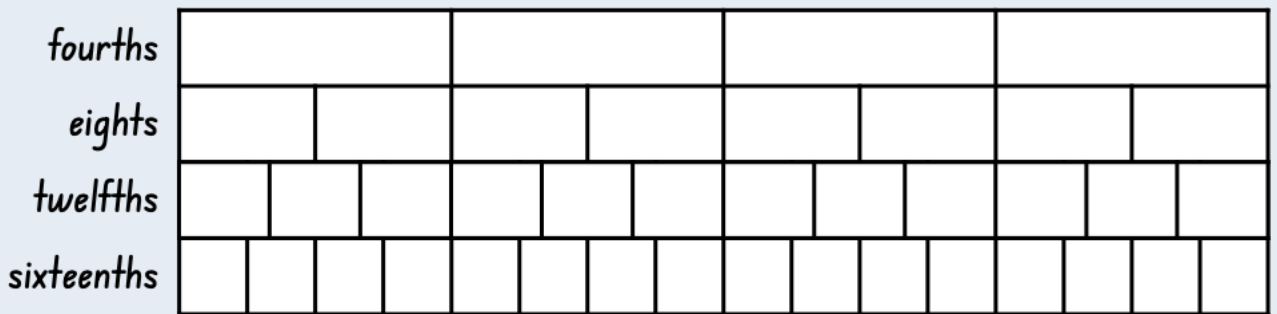
$$\frac{1}{2} = \frac{\square}{\square} = \frac{\square}{\square} = \frac{\square}{\square}$$



$$\frac{1}{3} = \frac{\square}{\square} = \frac{\square}{\square} = \frac{\square}{\square}$$



$$\frac{1}{4} = \frac{\square}{\square} = \frac{\square}{\square} = \frac{\square}{\square}$$



$$\frac{1}{5} = \frac{\square}{\square} = \frac{\square}{\square} = \frac{\square}{\square}$$

