


Fact Family Portal

The portals below have been locked. Fill in the missing numbers from the fact family to find the code and unlock the portal.




$3 \times \square = 15$

$5 \times 3 = \square$

$\square \div 3 = 5$

$15 \div 5 = \square$



$7 \times \square = 63$

$9 \times \square = \square$

$\square \div 7 = 9$

$63 \div \square = 7$



$4 \times \square = 32$

$\square \times 4 = \square$

$\square \div 4 = \square$

$\square \div 8 = 4$




$\square \times 2 = \square$

$2 \times \square = 12$

$\square \div \square = 2$

$\square \div 2 = \square$




$\square \times 7 = \square$

$7 \times \square = 77$

$\square \div 11 = \square$

$\square \div \square = \square$



$\square \times \square = 60$

$\square \times \square = \square$

$\square \div \square = 12$

$\square \div \square = 5$